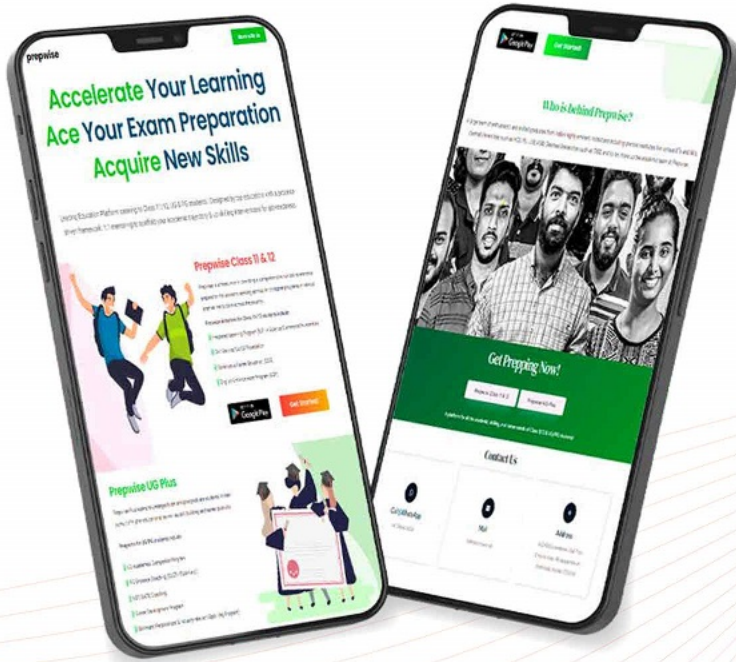




राष्ट्रीय परीक्षा एजेंसी
National Testing Agency
Excellence in Assessment



Download the Prepwise App Now!

Call or WhatsApp
91+ 7994441041

CUET UG Previous Year Question Paper 2022

Join Kerala's No.1
CUET UG Entrance Coaching





राष्ट्रीय परीक्षा एजेंसी
National Testing Agency
Excellence in Assessment



CUET UG

Previous Year Question Paper

2022

Section III

General Test



Section Name:GENERAL TEST

Question:

The ratio between the twice of present age of A and present age of B is 4:1.
After 5 years, the ratio between the age of A and B will be 4:3. Find the A's age at present.

A 4 years

B 5 years

C 6 years

D 7 years



Section Name:GENERAL TEST

Question:

In a certain school, 25% of students are below 6 years of age . The number of students above 6 years of age is $\frac{1}{3}$ of the number of students of 6 years age which is 72. what is the total number of students in the school?

A 125

B 126

C 127

D 128



Section Name:GENERAL TEST

Question:

A man takes 2 hours less to swim 21 miles downstream than to swim the same distance upstream. If the speed of the man in still water is 10 mph, the speed of the stream is.

A 6 mph

B 5 mph

C 7 mph

D 4 mph



Section Name:GENERAL TEST

Question:

A vendor brought bananas at 8 ₹for 20 and sold them at 6 for ₹ 14. Find his gain or loss percentage.

A 8.76 %

B 6.67 %

C 7.67 %

D 6.77 %

Section Name: GENERAL TEST

Question:

A laptop was sold for ₹ X in Patna. A person went to Kolkata to buy the same laptop from Kolkata on 40 % discount. His expenses on travel was ₹ 400. He sold the laptop at ₹ X in Patna and make a profit of 25 %, then what is the value of X .

A ₹ 1500

B ₹ 2000

C ₹ 2500

D ₹ 2200

Section Name:GENERAL TEST

Question:

A covered a certain distance at some speed. Had he moved 5 kmph, he would have taken 30 minutes less. If he had moved 3 kmph slower, he would have taken 30 minutes more. The distance he covered is.

A 50 KM

B 40 KM

C 30 KM

D 20 KM



Question:

A cubical container of size $8\text{ m} \times 12\text{ m} \times 6\text{ m}$ is to carry cubical boxes of size $8\text{ cm} \times 6\text{ cm} \times 3\text{ cm}$. How many boxes can be put in that container?

A 6000000

B 8000000

C 9000000

D 4000000



Section Name:GENERAL TEST

Question:

2 men and 3 women finish a job in 10 days, while 1 man and 4 women finish it in 15 days. In how many days will 15 women working together finish it?

A 10 days

B 14 days

C 14 days

D 15 days



Section Name:GENERAL TEST

Question:

X is twice as good as workman as Y and together they finish a piece of work in 12 days. In how many days will Y alone finish the work?

A 24 days

B 36 days

C 18 days

D 30 days



Section Name:GENERAL TEST

Question:

If each edge of a cube is increased by 25 %. What is the percentage change in volume of it?

A 96.45 %

B 94.35 %

C 91.3 %

D 95.31 %

Section Name:GENERAL TEST

Question:

If we melt a sphere into hemisphere the volume of the object-

- | | |
|---|-------------|
| A | Decreases |
| B | Remain same |
| C | Increases |
| D | Halves |



Section Name:GENERAL TEST

Question:

The least common multiple of two numbers is 80 and highest common factor of them is 2. If the difference between the two numbers is 6. Find the sum of the numbers.

A 24

B 36

C 26

D 34

Section Name:GENERAL TEST

Question:

Mohan borrowed ₹20000 from Radha at the simple interest rate of 5% per annum. He returned ₹25000. After that how much time did he returned the money?

A 3 years

B 4 years

C 5 years

D 6 years

Section Name:GENERAL TEST

Question:

Find the value of x if $13 : x :: 4 : 5$

A 16.25

B 17.25

C 15.25

D 14.25



Section Name:GENERAL TEST

Question:

The average of five consecutive numbers is 55. What is the their products_____

A 502403527

B 502472520

C 502452720

D 502405372

Section Name:GENERAL TEST

Question:

. $x\%$ of 1080 + 85% of 420 = 735. What is the value of x ?

A 40

B 30

C 35

D 25



Question:

The time taken by train 720 m long passing at 24 kmph, in passing a man walking in same direction at 6 kmph will be.

A 143 sec

B 144 sec

C 141 sec

D 145 sec



Section Name:GENERAL TEST

Question:

The average of the four consecutive odd numbers is 16. What is the sum of first and fourth numbers?

A 32

B 34

C 36

D 30



Section Name:GENERAL TEST

Question:

Simple interest of ₹ 1800 for 12 years at 4 % PA is equal to simple interest on ₹ 1200 at 6 % PA for x time. Find the value of x .

- | | |
|---|---------|
| A | 4 year |
| B | 16 year |
| C | 8 year |
| D | 12 year |



Section Name:GENERAL TEST

Question:

Find out the wrong numbers in the Sequence: 5, 16, 6, 16, 7, 16, 8, 16, 11

A	11
B	16
C	5
D	7

Section Name:GENERAL TEST

Question:

$$\frac{225-64}{15-8} = ?$$

A 48

B 36

C 25

D 23



Section Name:GENERAL TEST

Question:

If the area of a square is 64 m^2 , then find the perimeter of square.

A 16 m

B 32 m

C 48 m

D 64 m

CUET 2022 QUESTION PAPER

Section Name: GENERAL TEST

Question:

Which of the following numbers is divisible by '4'?

- A. 67920594
- B. 618703572
- C. 835290046
- D. 123456784

Choose the correct answer from the options given below:

- | | |
|---|--------------|
| A | A and B only |
| B | A and C only |
| C | B and D only |
| D | A and D only |

Section Name:GENERAL TEST

Question:

Solve $\sqrt[3]{(125)^3} = ?$

A 5

B 25

C 125

D 1



Section Name:GENERAL TEST

Question:

$$\sqrt{1^3 + 2^3 + 3^3} = ?$$

A

4

B

6

C

5

D

None of these

Section Name:GENERAL TEST

Question:

$x^2 - \sqrt{169} = 7 + \sqrt{256}$, then the value of x is.

A 5

B 6

C 7

D 8

CUET 2022 QUESTION PAPER

Section Name:GENERAL TEST

Question:

Evaluate $(225)^{0.16} \times (15)^{0.18}$

A $\sqrt{15}$

B 15

C $\sqrt[3]{15}$

D $\sqrt[5]{3}$

Section Name: GENERAL TEST

Question:

A man 3m tall is $30\sqrt{3}$ m away from tower. The angle of elevation from his eye to the top of the tower is 30° , the height of the tower is ____

A 22 m

B 33 m

C 11 m

D 44 m



Section Name:GENERAL TEST

Question:

Knowledge: Ignorance::Limited:?

A Immense

B Minute

C Restricted

D Dull



CUET 2022 QUESTION PAPER

Section Name:GENERAL TEST

Question:

Bright : Sparkling::Radiant : ?

A Handsome

B Beautiful

C Smart

D Vivid

Section Name:GENERAL TEST

Question:

BF : JN ::?.....:ZD

A RV

B RU

C QU

D QT



CUET 2022 QUESTION PAPER

Section Name:GENERAL TEST

Question:

Traveler: Journey::Sailor:?

A Crew

B Ship

C Voyage

D Water

Section Name: GENERAL TEST

Question:

Arrange the following words in the sequence they will appear in a dictionary

- A. Station
- B. Sanitation
- C. Stagnation
- D. Scientists
- E. Significance

Choose the correct answer from the options given below:

- | | |
|---|-------------------|
| A | B , D , E , C , A |
| B | B , A , C , D , E |
| C | C , D , E , B , A |
| D | D , C , E , A , B |



Section Name:GENERAL TEST

Question:

Manisha walks 10 km towards south. From there she walks 6 km towards east . Then, she walks 5 km towards north, followed by 3 km towards east. There, she took a left turn and walks for 5 more km straight. How far and in which direction is she now with reference to her starting point?

- | | |
|---|------------|
| A | 09 km west |
| B | 13 km west |
| C | 09 km east |
| D | 13 km west |

Section Name:GENERAL TEST

Question:

Find the missing term:

$$11 : 143 :: ? : 221$$

A 13

B 15

C 17

D 19



Section Name:GENERAL TEST

Question:

If 'OPERATION' is 1211229267181213, and 'DIAGNOSIS' is 2318262013128188, what will be the code for 'DOCTOR'?

A 1223242971

B 2312247129

C 2323127129

D 2312242971



Section Name:GENERAL TEST

Question:

Which two months in a year have the same calendar?

A October , December

B April , November

C June , October

D April , July

Section Name:GENERAL TEST

Question:

Complete the series:

4, 12, 36, 108, 324.....

A 972

B 648

C 1296

D 1620

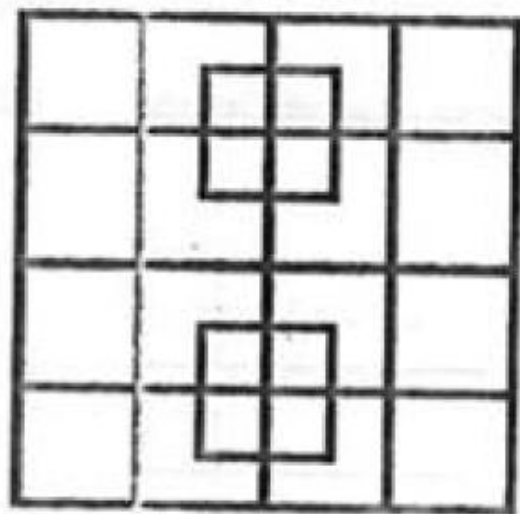


CUET 2022 QUESTION PAPER

Section Name: GENERAL TEST

Question:

How many squares are there in the given shape?



A 24

B 32

C 36

D 40



Section Name:GENERAL TEST

Question:

Pointing to a woman, Arjun said, "The daughter of that women is the grand-daughter of my mother" How is the women related to the Arjun?

A Sister

B Mother

C Sister-in-law

D Mother-in-law

Section Name:GENERAL TEST

Question:

Complete the series:

1440, 240, ..?... , 12, 4, 2

A 120

B 60

C 48

D 36

Section Name:GENERAL TEST

Question:

What was the day of the week on 26th May 2006?

A Friday

B Thursday

C Monday

D Tuesday

Section Name:GENERAL TEST

Question:

How many times are the hand of a clock at right angle in a day?

A 22

B 44

C 24

D 48



Section Name:GENERAL TEST

Question:

$$3 + 3.33 + 0.3 + 33.03 + 333 = ?$$

A 372.06

B 37.233

C 372.33

D 372.66



CUET 2022 QUESTION PAPER

Section Name:GENERAL TEST

Question:

Arrange the following in a logical order:

- A. Honey
- B. Flower
- C. Bee
- D. Wax

Choose the correct answer from the options given below:

- | | |
|---|---------------|
| A | A , C , D , B |
| B | B , A , D , C |
| C | B, C , A , D |
| D | D , C, B , A |



Section Name:GENERAL TEST

Question:

Which of the following Collections of letters will look the same in the mirror?

A OSMIHOM

B HIMOSTA

C VHRTRVH

D AOVIVOA



CUET 2022 QUESTION PAPER

Section Name: GENERAL TEST

Question:

Arrange the given words in a meaningful sequence

- A. Nursery
- B. School
- C. Employment
- D. Child
- E. College

Choose the correct answer from the options given below:

- | | |
|---|------------------|
| A | D , B , A, E , C |
| B | A , D, B, E , C |
| C | D , A, B , E, C |
| D | A, D , C , B, E |

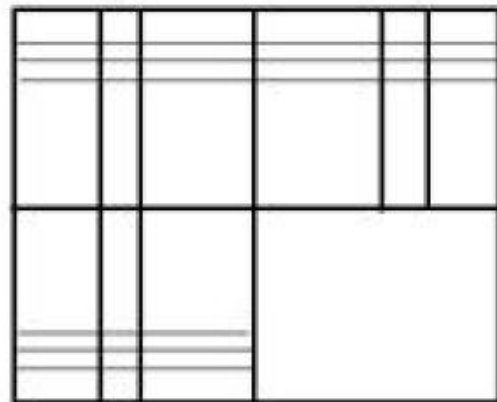


CUET 2022 QUESTION PAPER

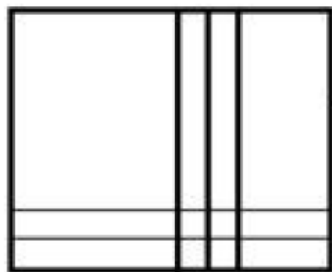
Section Name: GENERAL TEST

Question:

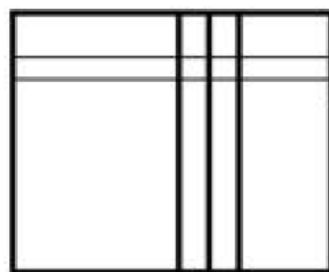
Complete the pattern:



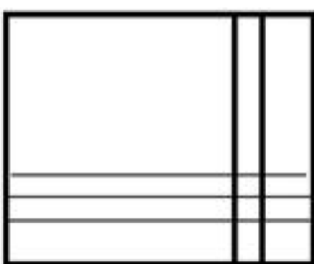
A



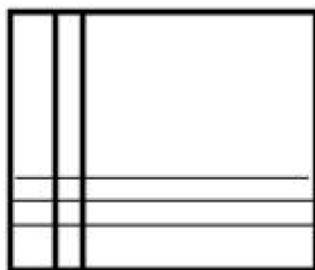
B



C



D



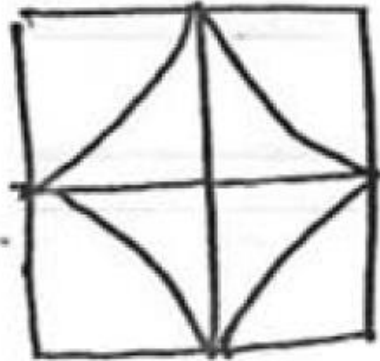


CUET 2022 QUESTION PAPER

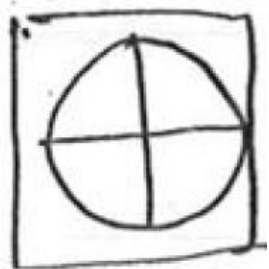
Section Name: GENERAL TEST

Question:


Which figure can be made by the re arrangement of the part of the given figure



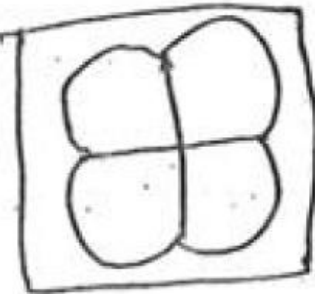
A




B



C



D



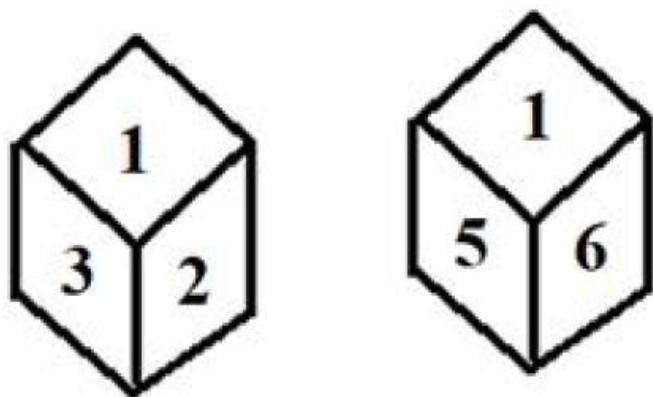


CUET 2022 QUESTION PAPER

Section Name: GENERAL TEST

Question:

Two positions of a dice are shown when 4 is at the bottom, what number will be on the top?



- | | |
|---|---|
| A | 1 |
| B | 2 |
| C | 5 |
| D | 6 |

CUET 2022 QUESTION PAPER


Section Name: GENERAL TEST

Question:

Match the item with the right set of circle:

Rhino : Tiger : Zoo


A




B



C



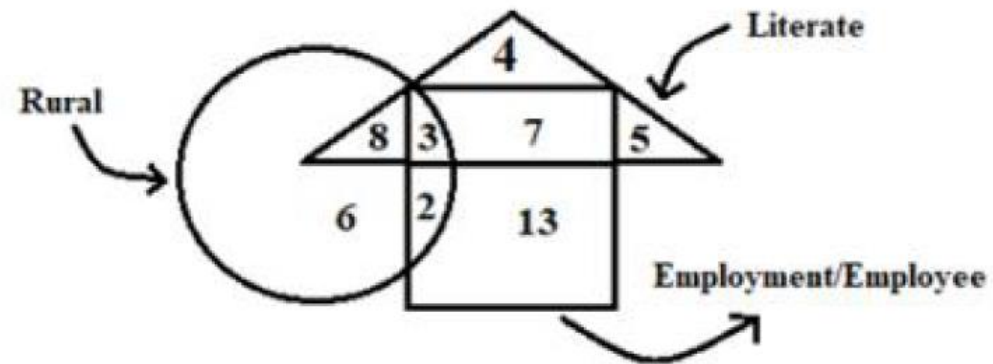
D



CUET 2022 QUESTION PAPER

Passage:

Study the diagram and answer the questions



Section Name:GENERAL TEST

Question:

How many literate are in employment?

A 7

B 3

C 10

D 13



CUET 2022 QUESTION PAPER

Section Name: GENERAL TEST

Question:

How many rural literate are employment?

A 8

B 3

C 7

D 10

Section Name: GENERAL TEST

Question:

How many illiterate rurals are employment?

A 3

B 2

C 7

D 13

CUET 2022 QUESTION PAPER

Passage:

Study the table carefully and answer the questions

In the given table production of rice (in tonne) of three different states Bihar, Jharkhand and U.P. over the years 2010 to 2013 is shown

States \ Year	2010	2011	2012	2013
Bihar	6.6	6.4	5.3	5.7
Jharkhand	7.4	7.0	6.7	7.3
U.P.	9.0	9.7	8.0	8.6

Question:

What is the difference between the total production of rice (in tonne) to all the three states in 2010 and 2012 respectively?

- | | |
|---|------------|
| A | 4.8 tonne |
| B | 3.0 tonne |
| C | 4.0 tonne |
| D | 5.05 tonne |



Section Name:GENERAL TEST

Question:

What is the average production of rice (in tonne) of state U.P. for the all years?

A 5.05 tonne

B 7.75 tonne

C 8.75 tonne

D 8.05 tonne



Section Name:GENERAL TEST

Question:

What is the percentage increase in the production of rice in state Jharkhand in the year 2013 in comparison with 2011?

A 4.28%

B 3.00%

C 6.28%

D 4.08%



Section Name:GENERAL TEST

Question:

Which company has introduced India's first intelligent messenger called 'Pops'?

A Phonepe

B Mobikwik

C Paytm Money

D Freecharge



Section Name:GENERAL TEST

Question:

Mudrarakshasa was written by:

A Kalidasa

B Valmiki

C Banabhatta

D Vishakhadatta



Section Name:GENERAL TEST

Question:

Which type of lens is used in simple microscope?

A Concave

B Convex

C Zoom lens

D Telephoto lens



Section Name:GENERAL TEST

Question:

Fundamental duties was inserted by which amendment act:

A 42

B 46

C 16

D 18



Section Name:GENERAL TEST

Question:

Gautama Buddha was born in:

A Sarnath

B Lumbini

C Bodhgaya

D Vaishali



Question:

In this question, four words have been given of which three are alike in some way and one is different. Find the odd one out.

A Lal Bahadur Shastri

B Rajiv Gandhi

C A.P.J Abdul Kalam

D Atal Bihari Bajpai

CUET 2022 QUESTION PAPER

Section Name: GENERAL TEST

Question:

Arrange the institutes given below as per their rank in the Times Higher Education (THE)'s World Reputation Ranking 2021?

- A. IIT Bombay
- B. IISc Bangalore
- C. IIT Delhi
- D. IIT Madras

Choose the correct answer from the options given below:

- | | |
|---|---------------|
| A | B , D , C , A |
| B | B , D , A , C |
| C | B , C , D , A |
| D | B , A , C , D |

**Question:****Match List I with List II**

List I	List II
A. Minister of Civil Aviation	I. Kiren Rijiju
B. Minister of Railways	II. Jyotiradiya Scindia
C. Minister of Law and Justice	III. Ashwini Vaishnaw
D. Minister of Labour and Employment	IV. Bhupendra Yadav

Choose the correct answer from the options given below:

- | | |
|---|---------------------------|
| A | A-II , B-III , C-I , D-IV |
| B | A-I , B-III , C-IV , D-II |
| C | A-IV , B-II , C-III , D-I |
| D | A-III , B-IV , C-II , D-I |



Section Name:GENERAL TEST

Question:

Who is the first French novelist to win the International Booker prize?

A David Diop

B Anna Moschovakis

C Jordan Clarkson

D Utah Jazz

Section Name:GENERAL TEST

Question:

‘Rafa: My story’ is an autobiography of tennis player named.

- | | |
|---|-----------------|
| A | Novak Djokovic |
| B | Roger Federer |
| C | Serena Williams |
| D | Rafel Nadal |



CUET 2022 QUESTION PAPER

Section Name: GENERAL TEST

Question:

Match **List I** with **List II**

List I	List II
A. Bank of Maharashtra CEO	I. Sashidhar Jagdishan
B. Axis Bank CEO	II. A.S. Rajeev
C. HDFC Bank CEO	III. Amitabha Chaudhary
D. ICICI Bank MD and CEO	IV. Sandeep Bakhshi

- | | |
|---|---------------------------|
| A | A-II , B-III , C-I , D-IV |
| B | A-II , B-I , C-IV , D-III |
| C | A-III , B-II , C-IV , D-I |
| D | A-IV , B-II , C-I , D-III |



Section Name:GENERAL TEST

Question:

Which social media giant has launched a new initiative 'Report it, Don't share it':

- | | |
|---|-----------|
| A | Twitter |
| B | Instagram |
| C | Facebook |
| D | Linkedin |



Section Name:GENERAL TEST

Question:

The largest metro network in the world:

A Delhi metro

B Moscow metro

C Shanghai metro

D Madrid metro

Section Name:GENERAL TEST

Question:

World Inequality Report 2022 provides comprehensive data on:

- A. Inequality in income
- B. Inequality in wealth
- C. Inequality in education
- D. Inequality in caste
- E. Inequality in society

Choose the correct answer from the options given below:

- | | |
|---|--------------|
| A | A and D only |
| B | C and E only |
| C | B and E only |
| D | A and B only |



CUET 2022 QUESTION PAPER

Section Name: GENERAL TEST

Question:

Match **List I** with **List II**

List I	List II
A. Bill Gates	I. Tesla
B. Elon Musk	II. Microsoft
C. Jeff Bezos	III. Reliance Industries Limited
D. Mukesh Ambani	IV. Amazon

Choose the correct answer from the options given below:

- | | |
|---|---------------------------|
| A | A-III , B-II , C-I , D-IV |
| B | A-III , B-IV , C-I , D-II |
| C | A-IV , B-I , C-II , D-III |
| D | A-II , B-I , C-IV , D-III |



CUET 2022 QUESTION PAPER

Section Name: GENERAL TEST

Question:

Match **List I** with **List II**

List I	List II
A. Energy	I. Watt
B. Power	II. Kilogram
C. Pressure	III. Joule
D. Mass	IV. Pascal

Choose the correct answer from the options given below:

- | | |
|---|---------------------------|
| A | A-II , B-I , C-IV , D-III |
| B | A-II , B-III , C-IV , D-I |
| C | A-III , B-IV , C-I , D-II |
| D | A-III , B-I , C-IV , D-II |

Section Name:GENERAL TEST

Question:

Choose the word which is necessary part of 'RESPIRATION'.

- | | |
|---|-----------------|
| A | Mouth |
| B | Circulation |
| C | Oxygen |
| D | Carbon monoxide |

CUET 2022 QUESTION PAPER

Question:

Match list I with List II

List I	List II
A. Owl	I. Mew
B. Lion	II. Bray
C. Cat	III. Roar
D. Donkey	IV. Hoot

Choose the correct answer from the options given below:

- A A-IV, B-I, C-III, D-II
- B A-II, B-IV, C-I, D-III
- C A-II, B-IV, C-III, D-I
- D A-IV, B-III, C-I, D-II